

May 6, 2019

Periods 1,2,4,6

No Warm Up

Class Work -

Periods 1 and 2 will take the Module 17 TEST

Periods 4 and 6 will work in their FSA Review Booklet

* Do not worry about the IXL skills if you did not understand.
If you were able to complete them, That is FANTASTIC!

21. ratio of π to the Circle

$$A = \pi r^2$$

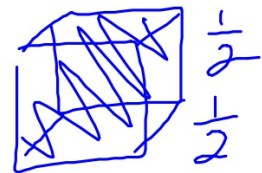
$$C = \pi d$$

2

27)

64 cubes

$$V = l \cdot w \cdot h$$

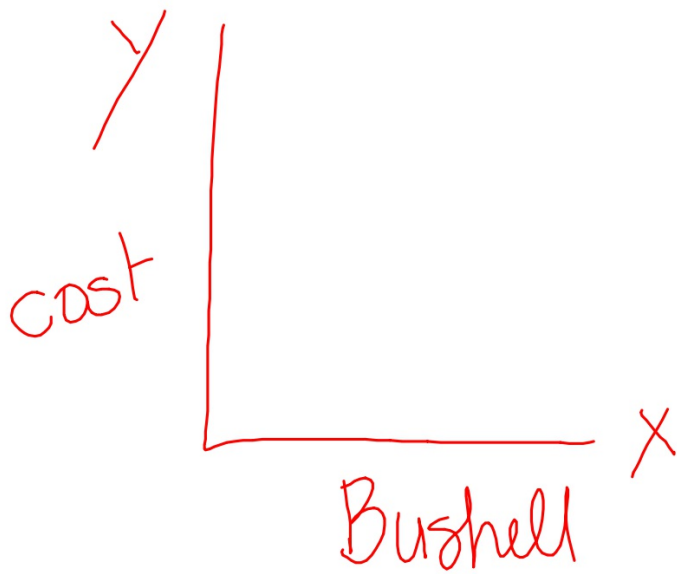


$\frac{1}{2}$ ft.

Ind.
x

Dep
y

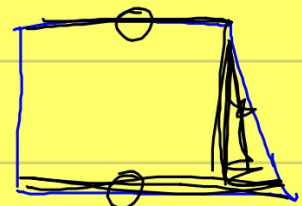
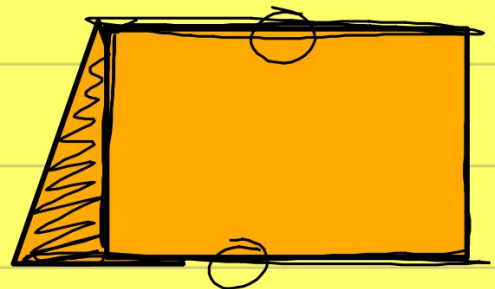

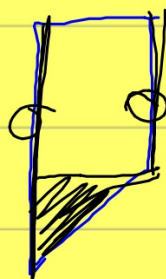
Egu



May 6, 2019
Period 5

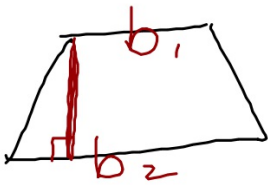
Warm Up- find the area of a triangle with a base of 4.5 inches and a height of 3.75 inches. Use the appropriate formula and show all work.

Class Work -
Video on Area of Trapezoids





$$\frac{1}{2}bh$$



$$\frac{(b_1 + b_2)}{2} \cdot h$$